

Name: _____ Date: _____



We have a map of where the amazing safari animals are. Use the map and these instructions to help us find them!

1. If I am at the **safari camp** and I go two spaces **north**, which animals will I find?

2. If I am at the **rhinos** and I go one space **north**, which animals will I find?

3. If I am at the **elephants** and I go one space **south**, which animal will I find?

4. If I am at the **hyenas** and I go one space **south**, which animals will I find?

5. If I am at the **leopard** and I go one space **east**, which animals will I find?

6. If I am at the **gazelles** and I go one space **east**, which animals will I find?

7. If I am at the **hippo** and I go one space **west**, which animals will I find?

8. If I am at the **cheetah** and I go one space **west**, which animals will I find?

Name: _____ Date: _____



We have a map of where the amazing safari animals are. Use the map and these instructions to help us find them!

1. If I am at the **safari camp** and I go three spaces **north** and one space **west**, which animals will I find?

2. If I am at the **rhinos** and I go two spaces **north** and one space **west**, which animals will I find?

3. If I am at the **giraffes** and I go one space **south** and two spaces **west**, which animals will I find?

4. If I am at the **hyenas** and I go two spaces **south** and two spaces **east**, which animal will I find?

5. If I am at the **leopard** and I go one space **east** and one space **south**, which animals will I find?

6. If I am at the **giraffes** and I go two spaces **west** and one space **south**, which animals will I find?

7. If I am at the **elephants** and I go one space **north** and three spaces **east**, which animals will I find?

8. If I am at the **cheetah** and I go four spaces **west** and two spaces **south**, which animals will I find?

Name: _____ Date: _____



We have a map of where the amazing safari animals are. Use the map and these instructions to help us find them!

1. If I am at the **safari camp** and I go three spaces **north**, one space **west** and one space **north**, which animals will I find?

2. If I am at the **rhinos** and I go two spaces **north**, one space **west** and one space **south** which animals will I find?

3. If I am at the **giraffes** and I go two spaces **south**, two spaces **west** and one space **north** which animals will I find?

4. If I am at the **hyenas** and I go two spaces **south**, two spaces **east** and two spaces **south** which animals will I find?

5. If I am at the **safari camp** how could I get to the **lion**?


6. If I am at the **hyenas** how could I get to the **elephants**?

7. If I am at the **elephants** how could I get to the **zebras**?

8. If I am at the **gamekeeper's lodge** how could I get to the **flamingos**?




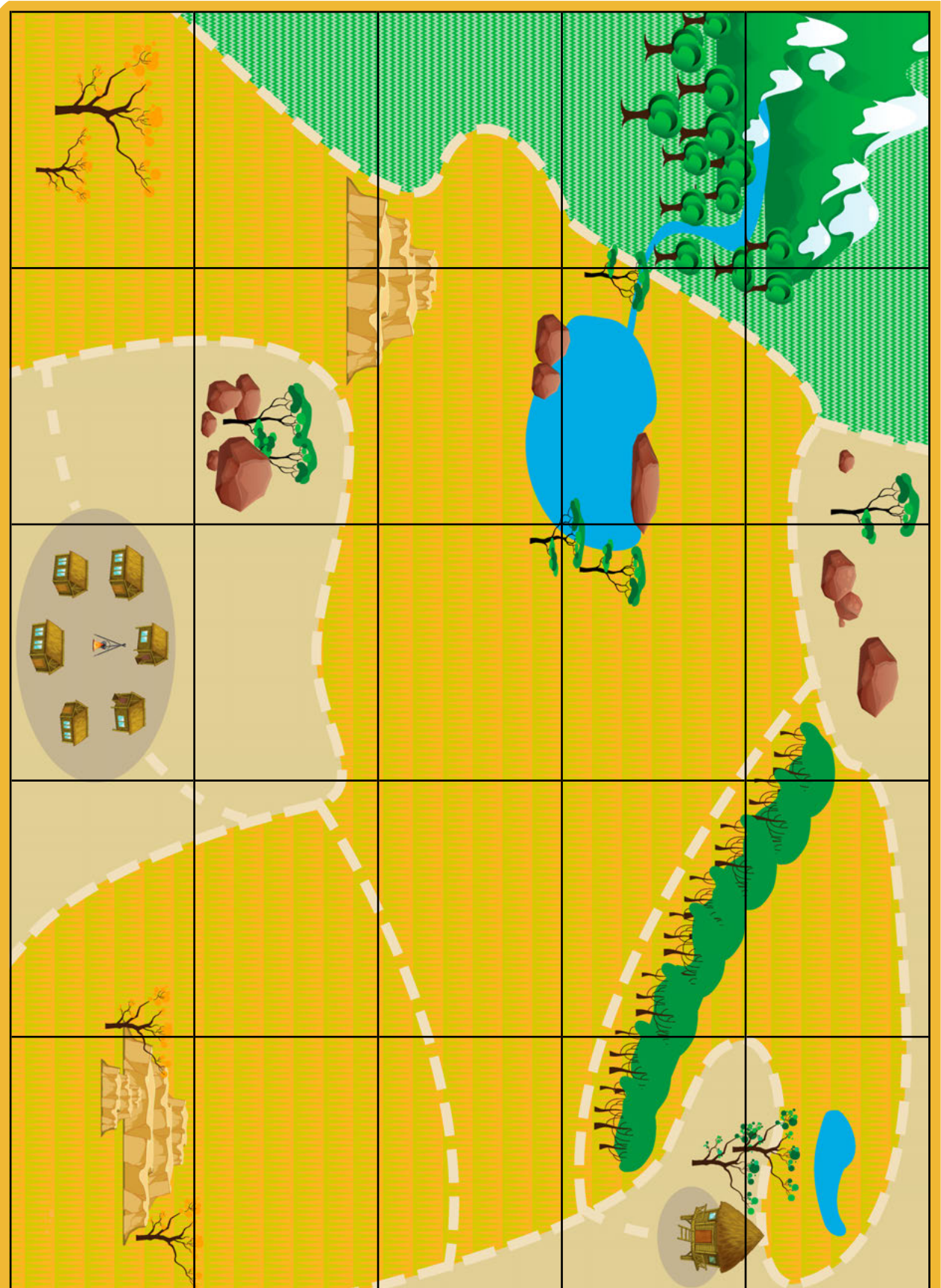
This safari map shows some of the things we saw in Kenya.




Let's go on Safari

Safari Jeeps








Use the clues to help you work out where we saw each animal on our Kenyan safari!





We saw lots of amazing animals on our safari. Use the clues below to help you stick the animals in the correct place on the map.

- We started in the safari camp and drove **two squares east**. We saw some rhinos by a big rock.
- Next, we drove **one square north** where some zebras were grazing on the grass.
- After that, we drove **one square north** again where we spotted a cheetah getting ready to pounce on its prey.
- We drove **one square west** where we saw a herd of buffalo. We watched the cheetah hunt the buffalo!
- Then we drove **two squares north**. We saw a family of giraffes eating the leaves from tall trees.
- After that, we drove **one square east**. Some flamingos were standing in the water.
- We then drove **two squares west** and **one square south**. We saw some elephants heading for the waterhole.
- We drove **one square west** and saw some hippos wallowing in the mud.
- We drove **one square north** and saw some gazelles by the mountains.
- Next, we drove **one square south** and **one square west**. We spotted a leopard creeping around the trees.
- Then we drove **one square south** and saw a daddy lion pacing around a rock.
- Then we drove **two squares south** and saw a mummy lion with her cubs.
- Finally, we drove **two squares east** to get back to camp.



Name: _____ Date: _____



We have a map of where the amazing safari animals are. Use the map and these instructions to help us find them!

1. If I am at the **safari camp** and I go two spaces **north**, which animals will I find?

Buffalo

2. If I am at the **rhinos** and I go one space **north**, which animals will I find?

Zebra

3. If I am at the **elephants** and I go one space **south**, which animal will I find?

Lion

4. If I am at the **hyenas** and I go one space **south**, which animals will I find?

Buffalo

5. If I am at the **leopard** and I go one space **east**, which animals will I find?

Elephants and hippos

6. If I am at the **gazelles** and I go one space **east**, which animals will I find?

Hyenas

7. If I am at the **hippo** and I go one space **west**, which animals will I find?

Giraffe

8. If I am at the **cheetah** and I go one space **west**, which animals will I find?

Buffalo

Name: _____ Date: _____



We have a map of where the amazing safari animals are. Use the map and these instructions to help us find them!

1. If I am at the **safari camp** and I go three spaces **north** and one space **west**, which animals will I find?

Elephants

2. If I am at the **rhinos** and I go two spaces **north** and one space **west**, which animals will I find?

Buffalo

3. If I am at the **giraffes** and I go one space **south** and two spaces **west**, which animals will I find?

Elephants

4. If I am at the **hyenas** and I go two spaces **south** and two spaces **east**, which animal will I find?

Cheetah

5. If I am at the **leopard** and I go one space **east** and one space **south**, which animals will I find?

Lions

6. If I am at the **giraffes** and I go two spaces **west** and one space **south**, which animals will I find?

Elephants

7. If I am at the **elephants** and I go one space **north** and three spaces **east**, which animals will I find?

Hippos

8. If I am at the **cheetah** and I go four spaces **west** and two spaces **south**, which animals will I find?

Lioness

Name: _____ Date: _____



We have a map of where the amazing safari animals are. Use the map and these instructions to help us find them!

1. If I am at the **safari camp** and I go three spaces **north**, one space **west** and one space **north**, which animals will I find?

Gazelle

2. If I am at the **rhinos** and I go two spaces **north**, one space **west** and one space **south** which animals will I find?

Zebra

3. If I am at the **giraffes** and I go two spaces **south**, two spaces **west** and one space **north** which animals will I find?

Elephants

4. If I am at the **hyenas** and I go two spaces **south**, two spaces **east** and two spaces **south** which animals will I find?

Rhino

5. If I am at the **safari camp** how could I get to the **lion**?

Two spaces north
and one space west

6. If I am at the **hyenas** how could I get to the **elephants**?

One space south
and one space west

7. If I am at the **elephants** how could I get to the **zebras**?

Two (or three) spaces east
and two spaces south

8. If I am at the **gamekeeper's lodge** how could I get to the **flamingos**?

One space north