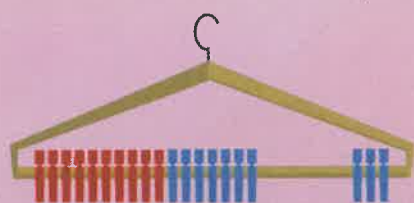



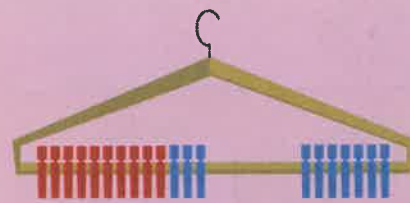
Pairs to 20



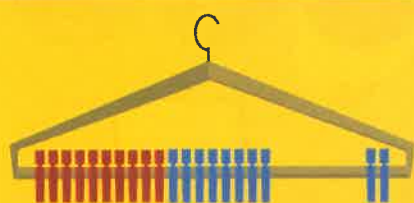
$$17 + \square = 20$$



$$15 + \square = 20$$




$$13 + \square = 20$$



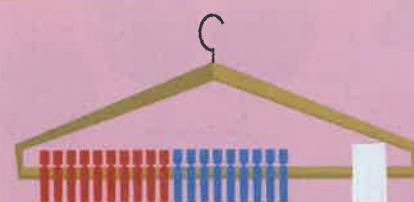
$$18 + \square = 20$$




$$10 + \square = 20$$



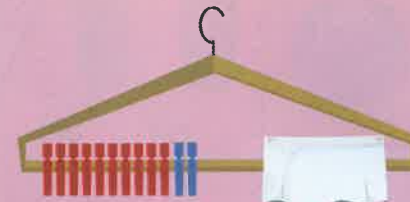
$$16 + \square = 20$$



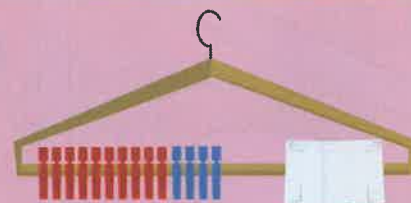
$$19 + \square = 20$$



$$11 + \square = 20$$



$$12 + \square = 20$$



$$14 + \square = 20$$



Use 20 interlocking cubes or other counting equipment to help you.



$$15 + 5 = 20$$

$$25 + 5 = 30$$

$$35 + 5 = \square$$

Carry on the pattern.