




# Adding and subtracting using bonds to 10




$$6 + \square = 10$$




$$3 + \square = 10$$




$$5 + \square = 10$$




$$8 + \square = 10$$




$$1 + \square = 10$$




$$10 - 2 = \square$$



$$10 - 5 = \square$$



$$10 - 3 = \square$$



$$10 - 4 = \square$$

Fill in the missing numbers to complete the additions and subtractions.



Use a coat hanger and pegs, interlocking cubes or your fingers to help you.



Choose one of the subtractions. Write a matching addition.

