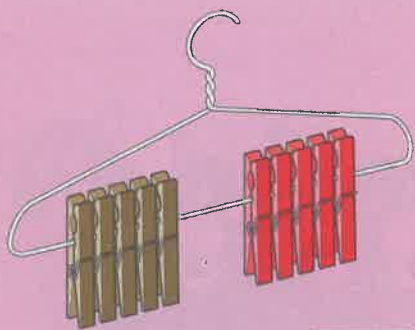


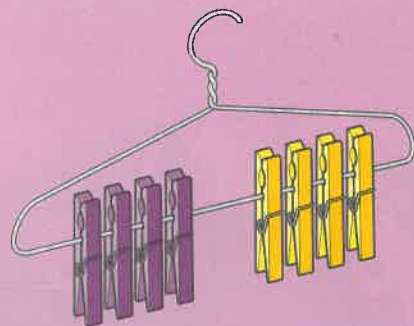
Doubles to double 10




Double 5 =




6 + 6 =



Double 4 =



2 + 2 =



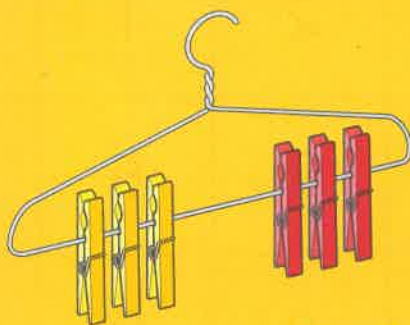
Double 9 =




10 + 10 =



7 + 7 =



Double 3 =



8 + 8 =



Add to find the doubles.



Choose some doubles. Use cubes to make matching towers and count them.



Write 1. Double it. Double the answer. Keep going! How far can you get?