

### Subtracting Money

4a. Holly and Matt have saved some money.



I have £3 and 70p.



I have £8 and 55p.


How much more money does Matt have than Holly? Explain how you know.



R

### Subtracting Money

4b. Kate and Sam have saved some money.



I have £6 and 95p.



I have £5 and 55p.

How much more money does Kate have than Sam? Explain how you know.

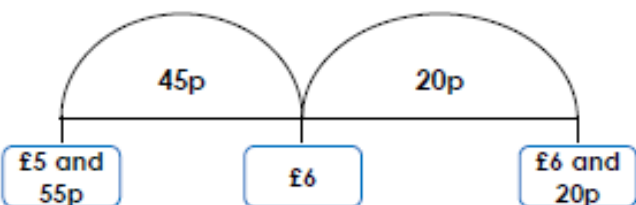


R

5a. Harry says,



I have £6 and 20p and I spend 55p on sweets. This means I will have £5 and 55p left.



Explain the mistake that Harry has made.

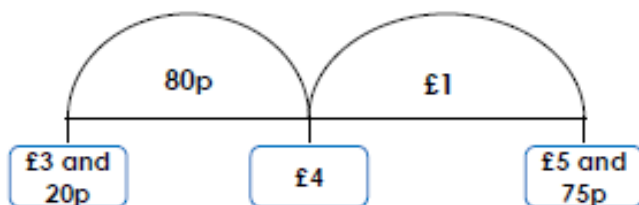


R

5b. Pam says,



I have £5 and 75p and I spend £1 and 80p on a sandwich. This means I will have £3 and 20p left.



Explain the mistake that Pam has made.



R

6a. Find possible values of the hidden digits. Complete the subtraction using 4 of the cards below. Find 2 possible solutions.



$$£ \square \text{ and } \square 5\text{p} - £ \square \text{ and } \square 0\text{p} = £3 \text{ and } 45\text{p}$$



PS

6b. Find possible values of the hidden digits. Complete the subtraction using 4 of the cards below. Find 2 possible solutions.



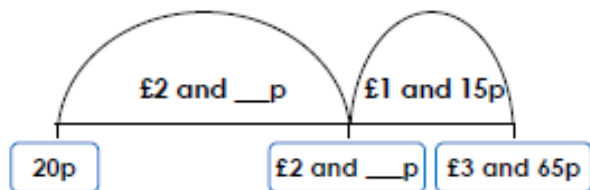
$$£ \square \text{ and } \square 5\text{p} - £ \square \text{ and } \square 0\text{p} = £4 \text{ and } 25\text{p}$$



PS

## Subtracting Money

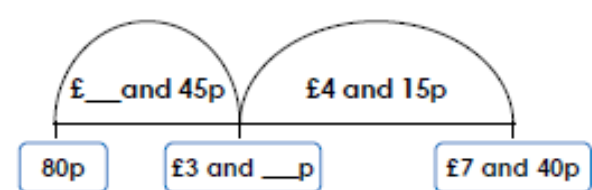
5a. Complete the missing numbers on the number line.



VF

## Subtracting Money

5b. Complete the missing numbers on the number line.



VF

6a. Finn likes two items in the gift shop.




How much more does the purse cost?



£\_\_\_ and \_\_\_p

VF

6b. Sophie likes two items in the gift shop.



How much less does the paint set cost?



£\_\_\_ and \_\_\_p

VF

7a. Jake had £9 and 75p in his piggy bank. He spent £2 and 60p. Complete the bar model to show how much he has left.






VF

7b. Bryan had £7 and 60p in his piggy bank. He spent £4 and 75p. Complete the bar model to show how much he has left.



VF

8a. Take away £3 and 45p from the amount shown below. How much is left?




Pounds	Pence
	
	Fifty
	



= \_\_\_\_\_

VF

8b. Take away £4 and 70p from the amount shown below. How much is left?

Pounds	Pence
	
Eight	
	



= \_\_\_\_\_

VF