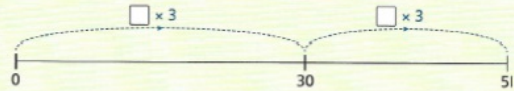
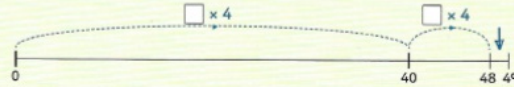


Copy each number line to answer these divisions.

1 $51 \div 3 = \square$




2 $49 \div 4 = \square$



3 $78 \div 5 = \square$



Chunky Chimp has 65 bananas.



He eats 5 bananas a day.



How many days are there until he runs out of bananas?



This gorilla has 57 mangos.



He eats 3 mangos a day.



How many days are there until he runs out of mangos?



This monkey has 74 figs.



He eats 4 figs a day.



For how many days can he have 4 figs?



How many figs will he have left over?

Page 24

1. $51 \div 3 = 17$

2. $49 \div 4 = 12 \text{ r } 1$

3. $78 \div 5 = 15 \text{ r } 3$

4. 13 (none left on day 14)

5. 19 (none left on day 20)

6. 18 days 2 left over

Bronze