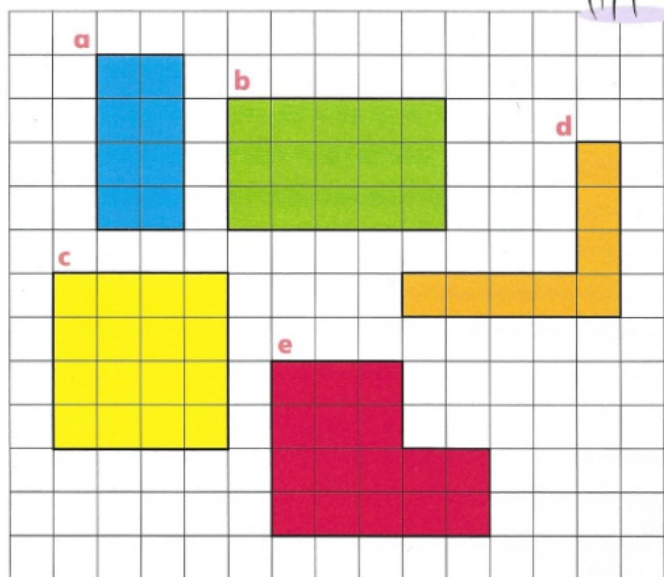


Measuring perimeters

Write the length of each side in squares.
Add the lengths together to calculate the perimeter of each shape.



- 1 Shape a = squares
- 2 Shape b = squares
- 3 Shape c = squares
- 4 Shape d = squares
- 5 Shape e = squares



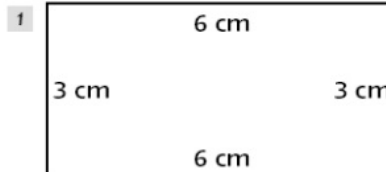
Draw a square with sides of 5 cm.
What is its perimeter?

3

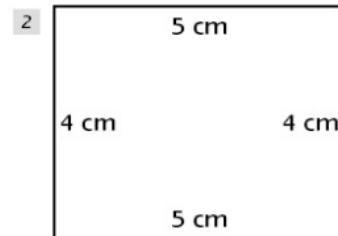
Rectangle perimeters



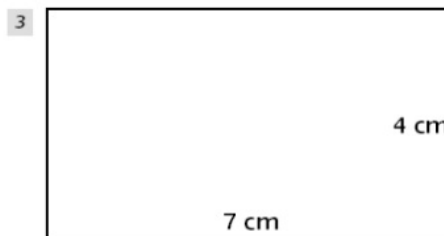
Calculate the perimeter of each of these rectangles:



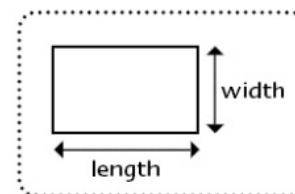
Perimeter =



Perimeter =



Perimeter =



Page 67

1. 12 squares
 2. 16 squares
 3. 16 squares
 4. 18 squares
 5. 18 squares
- Think. 20 cm