





Rounding 4-digit numbers

GRAB! A number line

Round these to the nearest 10.




Round these to the nearest 100.



8 4578

Round these to the nearest 1000.



12 4578

4 1287

5 6844

6 8304

9 2845

10 5885

13 5145

14 1885

THINK

Write a number which rounds to 5000 to the nearest 1000, 4500 to the nearest 100 and 4520 to the nearest 10.

74

I am confident with rounding 4-digit numbers.

Silver

Round each number to the nearest 10, 100 and 1000.

1 1287

2 3623

3 2535

4 6729

5 4572

6 4302

7 3608

8 5937

9 6851

10 7777

11 9440

12 5781

13 3514

14 8535

15 8448

Write a number to match each description.

16 It rounds to 2570 to the nearest 10.

17 It rounds to 8300 to the nearest 100.

18 It is less than 3600 but rounds to 4000 when rounded to the nearest 1000.

19 It rounds to 4000 to the nearest 1000 and to 3500 to the nearest 100.

20 It rounds to 3500 to the nearest 100 and to 3000 to the nearest 1000.

I am confident with rounding 4-digit numbers.

75

Gold