


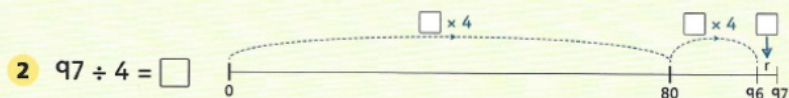
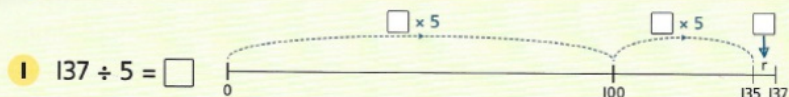



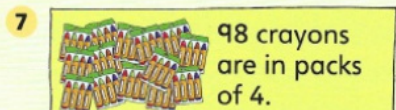
Complete these divisions.



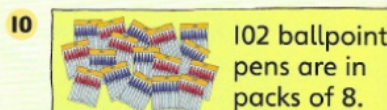
How many packs? How many felt-tipped pens are left over?



How many packs? How many rubbers are left over?



How many packs? How many crayons are left over?



How many packs? How many ballpoint pens are left over?



How many packs? How many highlighter pens are left over?



How many packs? How many sticky notes are left over?

## Page 26

Questions 1–5 each to have an accompanying number line.

1.  $137 \div 5 = 27 \text{ r } 2$

2.  $97 \div 4 = 24 \text{ r } 1$

3.  $74 \div 3 = 24 \text{ r } 2$

4.  $130 \div 8 = 16 \text{ r } 2$

5.  $175 \div 8 = 21 \text{ r } 7$

6.  $29 \text{ r } 2$

7.  $24 \text{ r } 2$

8.  $28 \text{ r } 1$

9.  $21 \text{ r } 2$

10.  $12 \text{ r } 6$

11.  $20 \text{ r } 3$

Gold