

## Year 3 Maths 01.02.21 - Bronze Challenge

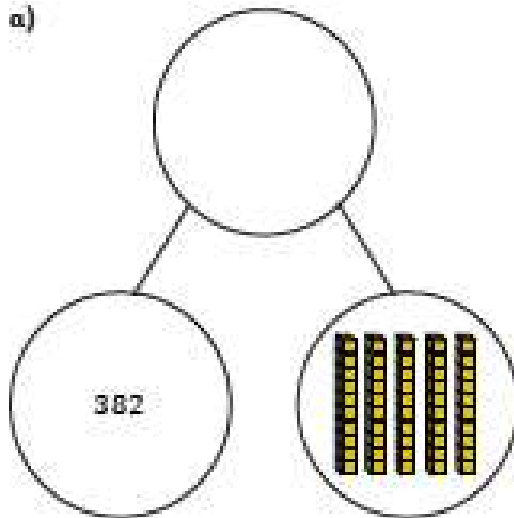
1) Complete the following calculations:

- a)  $782 + 5 \text{ tens}$
- b)  $345 + 70$
- c)  $628 - 6 \text{ tens}$
- d)  $815 - 40$

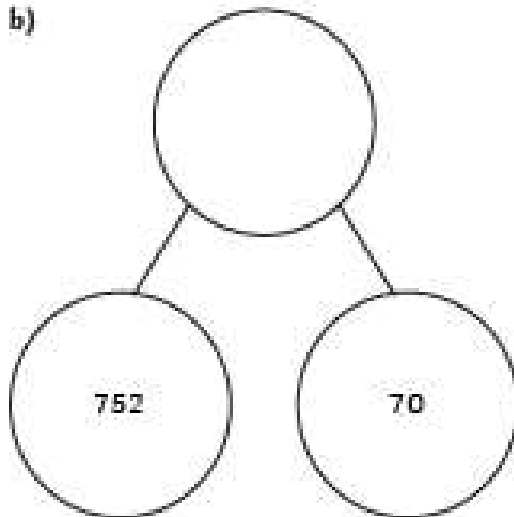


2) Complete the part-whole models:


a)



b)



3) David has 434 pencils in his shop. He sells 50 of them. How many pencils does he have left?



David